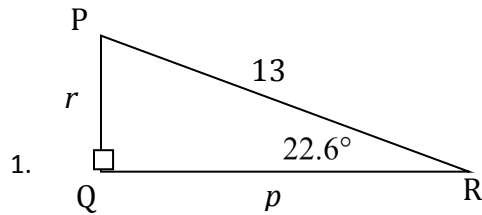
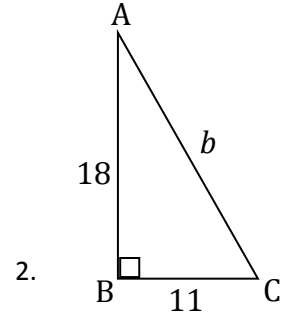


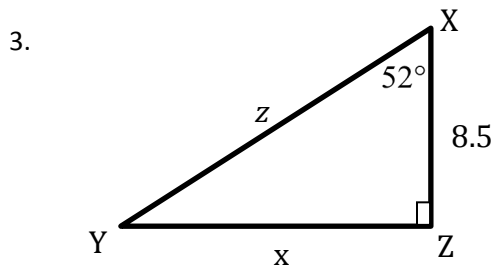
Solve the right triangle. Round to the nearest tenth.



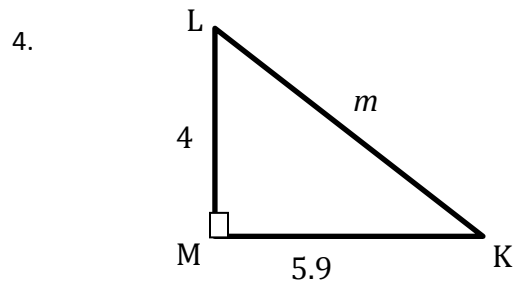
$p =$                        $\angle P =$   
 $q =$                        $\angle Q =$   
 $r =$                        $\angle R =$



$a =$                        $\angle A =$   
 $b =$                        $\angle B =$   
 $c =$                        $\angle C =$



$x =$                        $\angle X =$   
 $y =$                        $\angle Y =$   
 $z =$                        $\angle Z =$



$k =$                        $\angle K =$   
 $l =$                        $\angle L =$   
 $m =$                        $\angle M =$